



UNIVERSITY OF CAMBRIDGE INTERNATIONAL EXAMINATIONS
General Certificate of Education Advanced Subsidiary Level and Advanced Level

GEOGRAPHY

9696/11

Paper 1 Core Geography

May/June 2013

INSERT

3 hours

READ THESE INSTRUCTIONS FIRST

This Insert contains all the Figures and the Table referred to in the questions.

Question 5 Fig. 5a Content removed due to copyright restrictions.

This document consists of **8** printed pages.



2

Fig. 1A for Question 1

Two river catchments

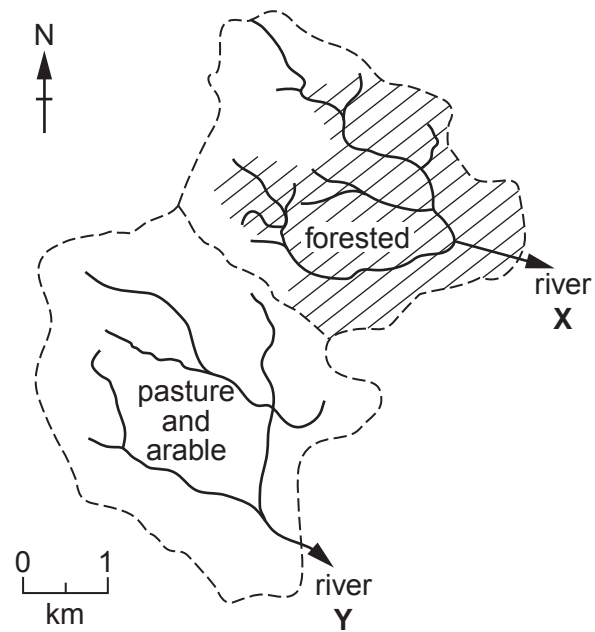


Fig. 1B for Question 1

Rainfall event

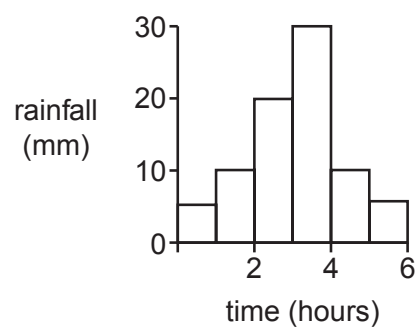
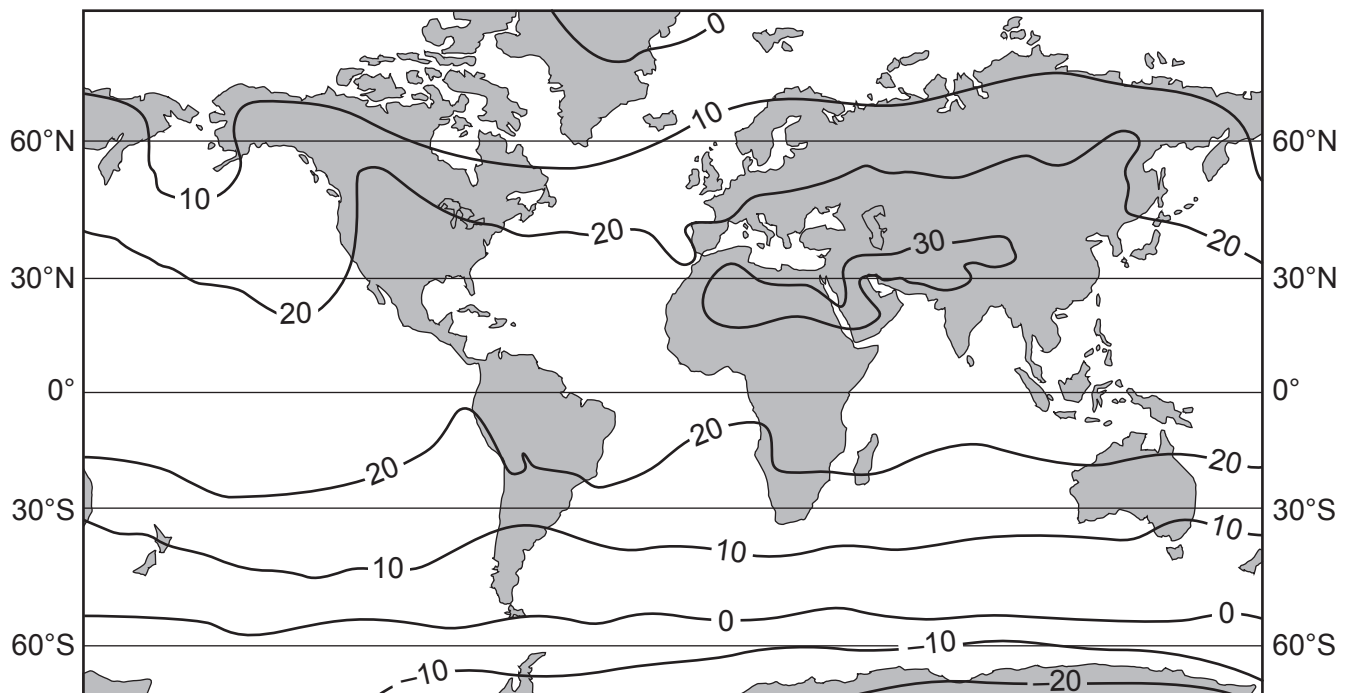


Fig. 2 for Question 2

Mean (average) temperatures ($^{\circ}\text{C}$) in July

4

Fig. 3 for Question 3

A plate boundary

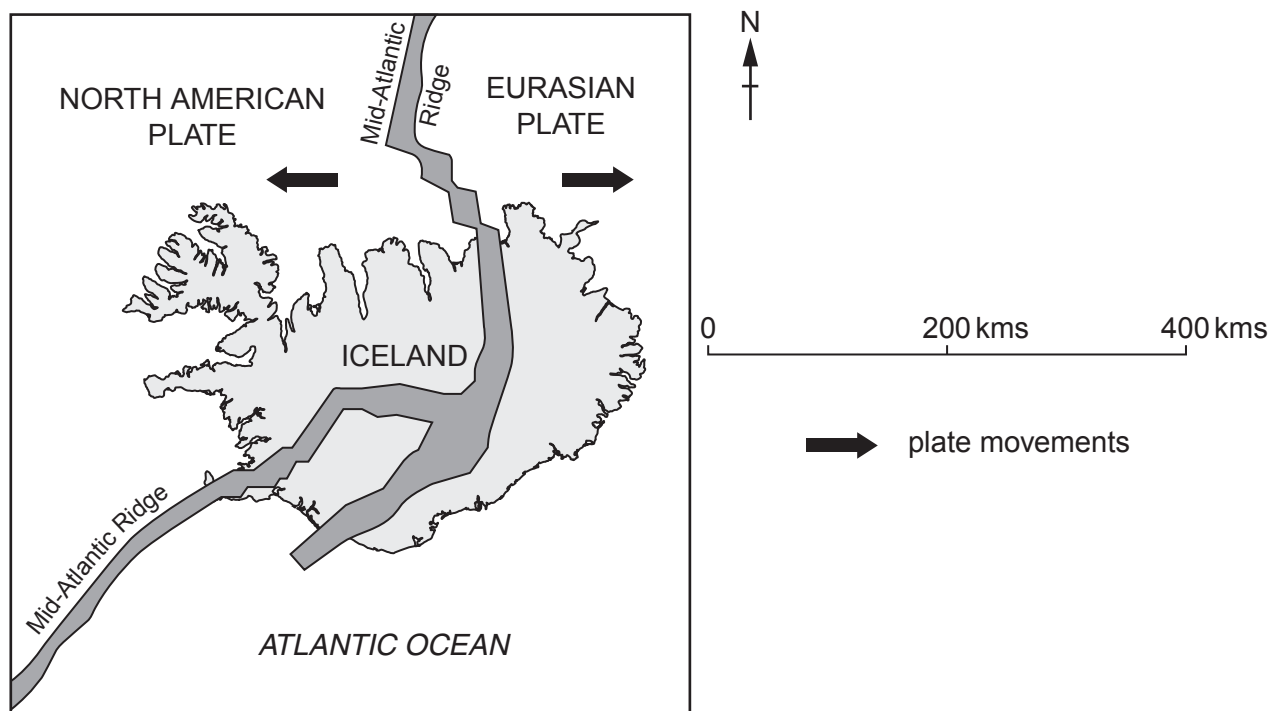
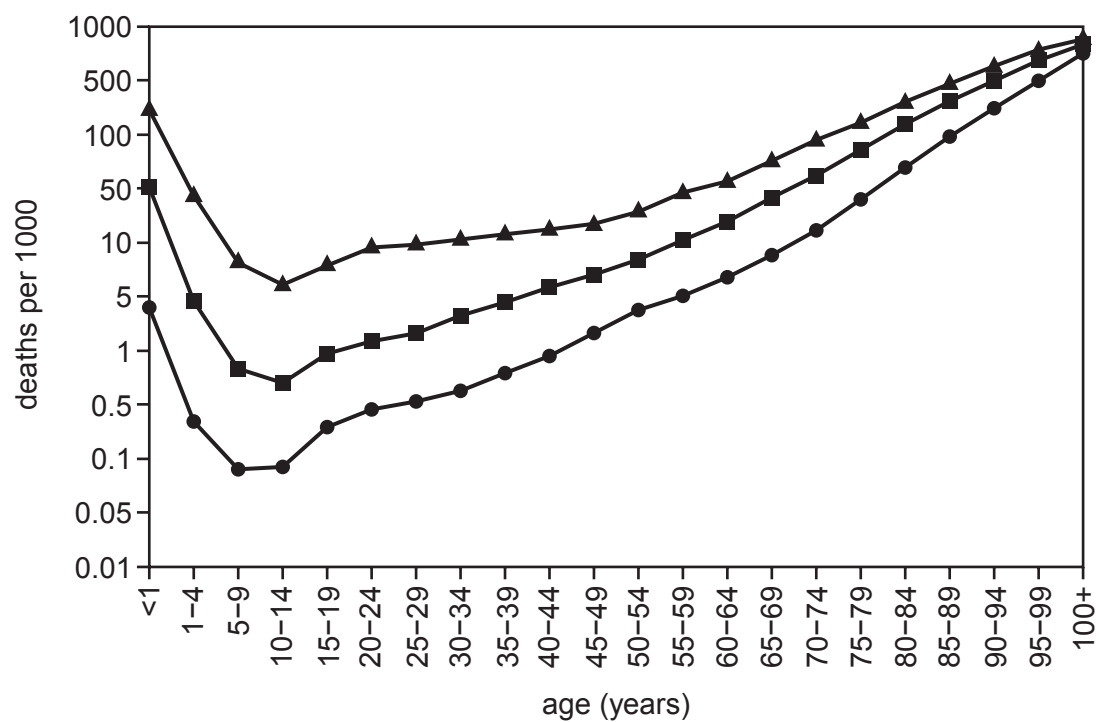


Fig. 4 for Question 4

Age-specific death rates for three countries, 2004



Key

- ▲ Afghanistan (LEDC)
- Guatemala (LEDC)
- Japan (MEDC)

Fig. 5B for Question 5

The countries of North and South America



Table 1 for Question 6

City development index (CDI), 2008

| Cities in | CDI | City housing | City infrastructure | City waste | City health | City education |
|---------------------------------|------|--------------|---------------------|------------|-------------|----------------|
| Latin America and the Caribbean | 66.3 | 62.9 | 70.4 | 39.5 | 82.7 | 75.7 |
| Africa | 42.9 | 49.7 | 36.2 | 26.0 | 50.4 | 52.0 |
| Asia-Pacific | 65.4 | 62.9 | 67.8 | 44.4 | 78.3 | 73.4 |
| MEDCs | 96.2 | 90.6 | 99.2 | 100.0 | 94.3 | 97.1 |

CDI is the UN Settlement Programme's indicator of the development of cities. It is an average of the scores for the five components shown. A score of 100 indicates that a city is highly developed.